

## Solution

**Subtract Within 20, #1**

Subtract to solve each problem. Show your work.

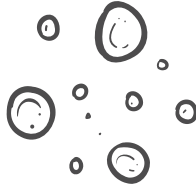
1.



Dorothy cut a cheesecake into 16 servings.  
After 12 were served, how many were left?

$$16 - 12 = 4$$

2.




Toddler Todd blew 18 bubbles on his first try.  
After six popped, how many were left?

$$18 - 6 = 12$$

3.

Seventeen people were riding a merry-go-round.  
When it stopped moving, four people left.  
How many riders stayed?



$$17 - 4 = 13$$


4.



Baby Ruth's toy was 15 steps away. She walked  
five steps before falling down. How many more  
steps were needed to reach her toy?

$$15 - 5 = 10$$

5.



Charlie grew 19 pumpkins for Halloween.  
He's carved seven. How many are left?

$$19 - 7 = 12$$