


Name: _____

Date: _____

Apple Subtraction


Cross out the apples to subtract. Write the answers.



$$5 - 1 = \underline{4}$$



$$3 - 2 = \underline{\quad}$$



$$4 - 1 = \underline{\quad}$$



$$5 - 2 = \underline{\quad}$$




$$4 - 3 = \underline{\quad}$$


Solution

Apple Subtraction


Cross out the apples to subtract. Write the answers.




$$5 - 1 = \underline{4}$$



$$3 - 2 = \underline{1}$$



$$4 - 1 = \underline{3}$$



$$5 - 2 = \underline{3}$$



$$4 - 3 = \underline{1}$$